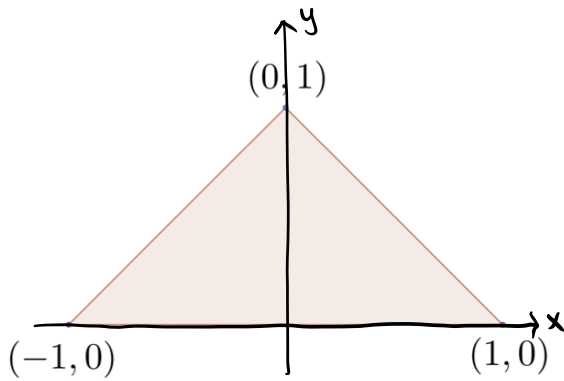


1. Consider the triangle with vertices at $(1, 0)$, $(-1, 0)$, and $(0, 1)$:



a) (2 points) Find the area of the triangle.

The triangle has base 2 and height 1 \Rightarrow Area = $\frac{1}{2} \cdot 2 \cdot 1 = \boxed{1}$

b) (4 points) Suppose the density (mass per unit area) is $\rho(x, y) = x^2$. Find the mass of the triangle.

The left side and the right side of the triangle are given by the lines $x = y - 1$ and $x = 1 - y$.

\Rightarrow The triangular domain D is given by $0 \leq y \leq 1$, $y - 1 \leq x \leq 1 - y$.

$$m = \iint_D \rho(x, y, z) dA = \int_0^1 \int_{y-1}^{1-y} x^2 dx dy = \int_0^1 \left. \frac{x^3}{3} \right|_{x=y-1}^{x=1-y} dy = \int_0^1 \frac{2}{3} (1-y)^3 dy$$

$$\stackrel{\substack{\uparrow \\ u=1-y}}{=} \int_1^0 \frac{2}{3} u^3 (-1) du = -\frac{u^4}{6} \Big|_{u=1}^{u=0} = \boxed{\frac{1}{6}}$$

c) (4 points) Suppose the density is $\rho(x, y) = y^2$. Find the mass of the triangle.

$$m = \iint_D \rho(x, y, z) dA = \int_0^1 \int_{y-1}^{1-y} y^2 dx dy = \int_0^1 2(1-y)y^2 dy = \left(\frac{2}{3} y^3 - \frac{1}{2} y^4 \right) \Big|_{y=0}^{y=1} = \boxed{\frac{1}{6}}$$

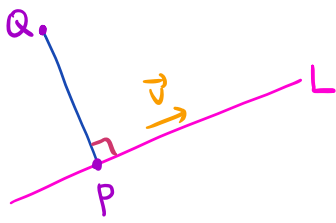
Note In both parts, the density functions are even with respect to x .

Since the domain D is symmetric about the y -axis, the mass is twice the mass of the part in the first quadrant. Hence you

can compute $m = 2 \int_0^1 \int_0^{1-y} \rho(x, y, z) dx dy$.

2. The line $(x, y, z) = (1 - 2t, 2t - 1, t)$, with t as the parameter, is denoted by L . The point Q is $(1, 2, 3)$.

- a) (5 points) Find a point P on L such that the line from P to Q is orthogonal (perpendicular) to L .



L has a direction vector $\vec{v} = (-2, 2, 1)$

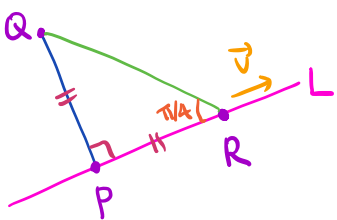
\vec{PQ} is orthogonal to $\vec{v} \Rightarrow \vec{PQ} \cdot \vec{v} = 0$

$P = (1 - 2t, 2t - 1, t) \Rightarrow \vec{PQ} = (2t, 3 - 2t, 3 - t)$

$$\vec{PQ} \cdot \vec{v} = 0 \Rightarrow (2t, 3 - 2t, 3 - t) \cdot (-2, 2, 1) = 0 \Rightarrow 9 - 9t = 0 \Rightarrow t = 1$$

$$\Rightarrow P = (1 - 2 \cdot 1, 2 \cdot 1 - 1, 1) = \boxed{(-1, 1, 1)}$$

- b) (5 points) Find a point R on L such that the line from R to Q makes an angle equal to 45° or $\pi/4$ with L .



$$\frac{|\vec{PQ}|}{|\vec{PR}|} = \tan \frac{\pi}{4} = 1 \Rightarrow |\vec{PQ}| = |\vec{PR}|$$

$$\vec{PQ} = (2, 1, 2) \Rightarrow |\vec{PQ}| = \sqrt{2^2 + 1^2 + 2^2} = 3$$

\vec{PR} is parallel to \vec{v} with $|\vec{PR}| = |\vec{PQ}| = 3$.

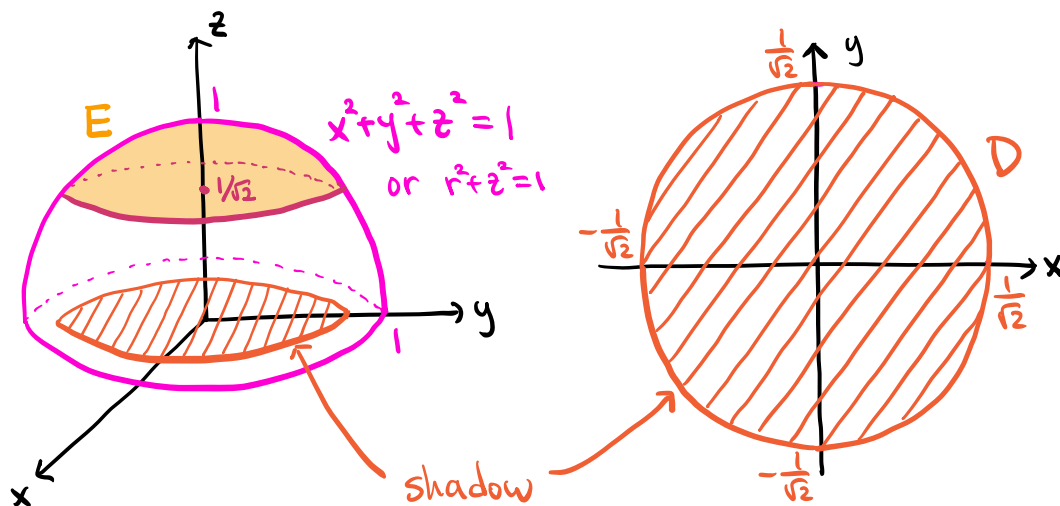
$$|\vec{v}| = \sqrt{(-2)^2 + 2^2 + 1^2} = 3 \Rightarrow \vec{PR} = \pm \vec{v} = \pm (-2, 2, 1)$$

$$\Rightarrow R = P \pm \vec{PR} = (-1, 1, 1) \pm (-2, 2, 1) = \boxed{(-3, 3, 2) \text{ or } (1, -1, 0)}$$

Note Alternatively, since \vec{QR} and \vec{v} form an angle of $\frac{\pi}{4}$ radians, you can set $R = (2u, 3 - 2u, 3 - u)$ from the line equation and use the dot product formula $\vec{QR} \cdot \vec{v} = |\vec{QR}| |\vec{v}| \cos\left(\frac{\pi}{4}\right) = \frac{1}{\sqrt{2}} |\vec{QR}| |\vec{v}|$ to solve for u . This method does not make use of the point P , but involves some algebraic computations.

3. Consider the solid sphere $x^2 + y^2 + z^2 \leq 1$. * The answers on the archive are incorrect.

a) (3 points) Find the volume of the sphere above the plane $z = \frac{1}{\sqrt{2}}$.



E: the solid sphere above the plane $z = \frac{1}{\sqrt{2}}$.

In cylindrical coordinates: $x^2 + y^2 + z^2 = 1 \Rightarrow r^2 + z^2 = 1 \Rightarrow z = \sqrt{1-r^2}$ ($z \geq 0$)

Intersection: $z = \frac{1}{\sqrt{2}}$ and $z = \sqrt{1-r^2} \Rightarrow \frac{1}{\sqrt{2}} = \sqrt{1-r^2} \Rightarrow \frac{1}{2} = 1-r^2 \Rightarrow r = \frac{1}{\sqrt{2}}$.

The shadow on the xy -plane is given by $0 \leq \theta \leq 2\pi$, $0 \leq r \leq \frac{1}{\sqrt{2}}$

For each point on the shadow: $\frac{1}{\sqrt{2}} \leq z \leq \sqrt{1-r^2}$.

\Rightarrow E is given by $0 \leq \theta \leq 2\pi$, $0 \leq r \leq \frac{1}{\sqrt{2}}$, $\frac{1}{\sqrt{2}} \leq z \leq \sqrt{1-r^2}$.

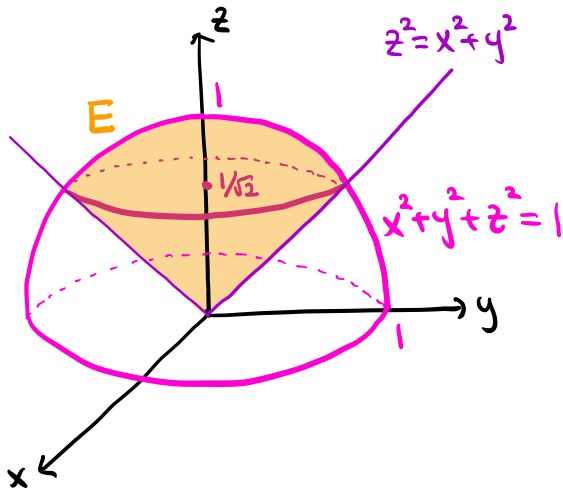
$$\Rightarrow \text{Vol}(E) = \iiint_E 1 dV = \int_0^{2\pi} \int_0^{1/\sqrt{2}} \int_{1/\sqrt{2}}^{\sqrt{1-r^2}} 1 \cdot r dz dr d\theta = \int_0^{2\pi} \int_0^{1/\sqrt{2}} (\sqrt{1-r^2} - \frac{1}{\sqrt{2}}) r dr d\theta$$

$$\stackrel{\substack{\uparrow \\ u=1-r^2}}{=} \int_0^{2\pi} \int_1^{1/2} (u^{1/2} - \frac{1}{\sqrt{2}}) (-\frac{1}{2}) du d\theta = \int_0^{2\pi} \left(-\frac{u^{3/2}}{3} + \frac{\sqrt{2}}{4} u \right) \Big|_{u=1}^{u=1/2} d\theta$$

$$= \int_0^{2\pi} \frac{1}{3} - \frac{5}{12\sqrt{2}} d\theta = \boxed{\frac{2\pi}{3} - \frac{5\pi}{6\sqrt{2}}}$$

Note You can also use the bounds $0 \leq z \leq \frac{1}{\sqrt{2}}$, $0 \leq \theta \leq 2\pi$, $0 \leq r \leq \sqrt{1-z^2}$ obtained by the cross section method.

b) (3 points) Find the volume inside the sphere and above the cone $z^2 = x^2 + y^2$, $z \geq 0$.



Intersection : $z^2 = x^2 + y^2$ and $x^2 + y^2 + z^2 = 1$
 $\Rightarrow z^2 + z^2 = 1 \Rightarrow z = \frac{1}{\sqrt{2}}$ ($z \geq 0$)

The solid E consists of the two parts:

- E_a is the part above the plane $z = \frac{1}{\sqrt{2}}$
- E_b is the part below the plane $z = \frac{1}{\sqrt{2}}$

The intersection circle is of radius $\frac{1}{\sqrt{2}}$.

$\text{Vol}(E_a) = \frac{2\pi}{3} - \frac{5\pi}{6\sqrt{2}}$, $\text{Vol}(E_b) = \frac{1}{3} \cdot \pi \left(\frac{1}{\sqrt{2}}\right)^2 \cdot \frac{1}{\sqrt{2}} = \frac{\pi}{6\sqrt{2}}$

(a) volume of cone

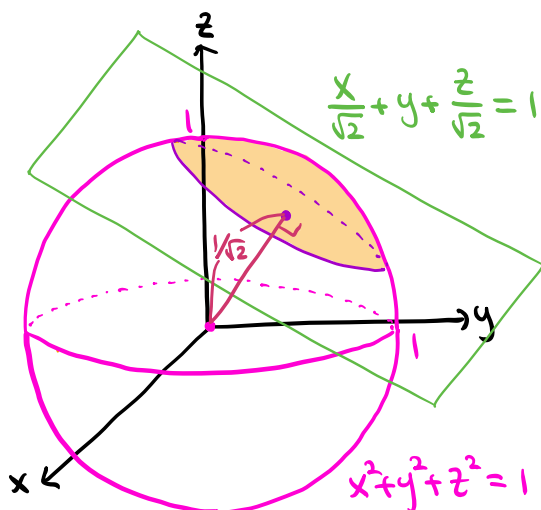
$\Rightarrow \text{Vol}(E) = \text{Vol}(E_a) + \text{Vol}(E_b) = \frac{2\pi}{3} - \frac{5\pi}{6\sqrt{2}} + \frac{\pi}{6\sqrt{2}} = \frac{2\pi}{3} - \frac{2\pi}{3\sqrt{2}}$

c) (4 points) The plane $\frac{x}{\sqrt{2}} + y + \frac{z}{\sqrt{2}} = 1$ cuts the solid sphere into two pieces. Find the volumes of both the pieces.

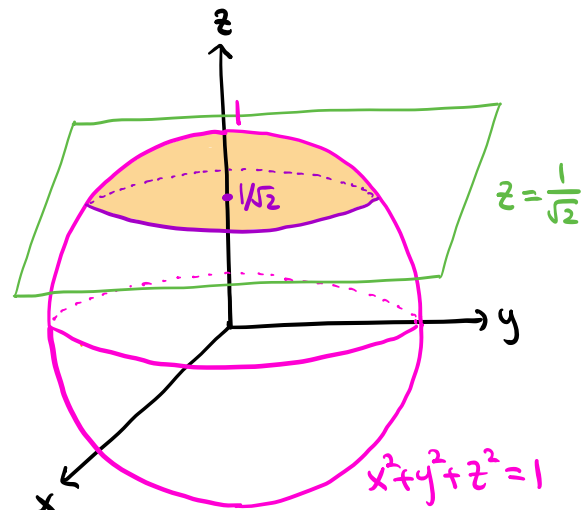
The distance from $(0,0,0)$ to the plane $\frac{x}{\sqrt{2}} + y + \frac{z}{\sqrt{2}} - 1 = 0$ is

$$\frac{\left| \frac{0}{\sqrt{2}} + 0 + \frac{0}{\sqrt{2}} - 1 \right|}{\sqrt{\left(\frac{1}{\sqrt{2}}\right)^2 + 1^2 + \left(\frac{1}{\sqrt{2}}\right)^2}} = \frac{1}{\sqrt{2}}$$

\Rightarrow We can rotate the plane $\frac{x}{\sqrt{2}} + y + \frac{z}{\sqrt{2}} = 1$ to the plane $z = \frac{1}{\sqrt{2}}$.



rotate



E_1 : the part above the plane $z = \frac{1}{\sqrt{2}} \Rightarrow \text{Vol}(E_1) = \frac{2\pi}{3} - \frac{5\pi}{6\sqrt{2}}$

(a)

E_2 : the part below the plane $z = \frac{1}{\sqrt{2}} \Rightarrow \text{Vol}(E_2) = \frac{4\pi}{3} \cdot 1^3 - \text{Vol}(E_1) = \frac{2\pi}{3} + \frac{5\pi}{6\sqrt{2}}$

volume of sphere

4. Consider the surface $2z^2 = x^4 + y^2$.

a) (2 points) Find the gradient of $f(x, y, z) = x^4 + y^2 - 2z^2$ at $(x, y, z) = (1, 1, 1)$.

$$\nabla f = (f_x, f_y, f_z) = (4x^3, 2y, -4z) \Rightarrow \nabla f(1, 1, 1) = \boxed{(4, 2, -4)}$$

b) (2 points) Find the tangent plane to the surface at the point $(1, 1, 1)$.

$$2z^2 = x^4 + y^2 \Rightarrow x^4 + y^2 - 2z^2 = 0 : \text{ a level surface of } f(x, y, z) = x^4 + y^2 - 2z^2$$

$$\nabla f(1, 1, 1) = (4, 2, -4) \text{ is a normal vector}$$

$$\Rightarrow \text{The tangent plane at } (1, 1, 1) \text{ is given by } \boxed{4(x-1) + 2(y-1) - 4(z-1) = 0}$$

c) (3 points) Find the area of the tangent plane inside the cylinder $x^2 + y^2 = 1$.

$$4(x-1) + 2(y-1) - 4(z-1) = 0 \Rightarrow 4x + 2y - 4z = 2 \Rightarrow z = x + \frac{y}{2} - \frac{1}{2}$$

$$\text{The surface } S \text{ is parametrized by } \vec{r}(x, y) = (x, y, x + \frac{y}{2} - \frac{1}{2})$$

$$\text{The domain } D \text{ is given by } x^2 + y^2 \leq 1.$$

$$\text{Area}(S) = \iint_S 1 dS = \iint_D |\vec{r}_x \times \vec{r}_y| dA$$

$$\vec{r}_x = (1, 0, 1), \vec{r}_y = (0, 1, \frac{1}{2}) \Rightarrow \vec{r}_x \times \vec{r}_y = (-1, -\frac{1}{2}, 1)$$

$$\Rightarrow \text{Area}(S) = \iint_D \sqrt{(-1)^2 + (-\frac{1}{2})^2 + 1^2} dA = \iint_D \frac{3}{2} dA = \frac{3}{2} \text{Area}(D) = \frac{3}{2} \cdot \pi \cdot 1^2 = \boxed{\frac{3\pi}{2}}$$

Area of disk

d) (3 points) Find the area of the tangent plane inside the elliptical cylinder $\frac{x^2}{9} + \frac{z^2}{16} = 1$.

$$4(x-1) + 2(y-1) - 4(z-1) = 0 \Rightarrow 4x + 2y - 4z = 2 \Rightarrow y = -2x + 2z + 1$$

$$\text{The surface } S \text{ is parametrized by } \vec{r}(x, z) = (x, -2x + 2z + 1, z)$$

$$\text{The domain } D \text{ is given by } \frac{x^2}{9} + \frac{z^2}{16} \leq 1$$

$$\text{Area}(S) = \iint_S 1 dS = \iint_D |\vec{r}_x \times \vec{r}_z| dA$$

$$\vec{r}_x = (1, -2, 0), \vec{r}_z = (0, 2, 1) \Rightarrow \vec{r}_x \times \vec{r}_z = (-2, -1, 2)$$

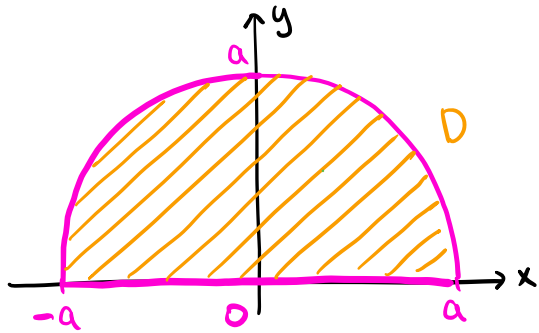
$$\Rightarrow \text{Area}(S) = \iint_D \sqrt{(-2)^2 + (-1)^2 + 2^2} dA = \iint_D 3 dA = 3 \text{Area}(D) = 3 \cdot \pi \cdot 3 \cdot 4 = \boxed{36\pi}$$

Area of ellipse

Note On the exam, you can use the fact that the area of the ellipsoid $\frac{x^2}{a^2} + \frac{y^2}{b^2} \leq 1$ is $ab\pi$. For an explanation, see Fact 1 in the Final exam facts note.

5. The density (mass per unit area) is $\rho(x, y) = 1$ throughout this problem.

- a) (1 point) Consider the semi-circular plate $x^2 + y^2 \leq a^2$ with $y \geq 0$. Find the mass of this plate.



The domain D is a semidisk of radius a .

$$m = \iint_D \rho(x, y) dA = \iint_D 1 dA = \text{Area}(D)$$

$$= \frac{1}{2} \pi a^2 = \boxed{\frac{\pi a^2}{2}}$$

Area of disk

- b) (4 points) Find the y -coordinate of the center of mass of the plate of part (a).


$$\bar{y} = \frac{1}{m} \iint_D y \rho(x, y) dA = \frac{2}{\pi a^2} \iint_D y dA$$

In polar coordinates, D is given by $0 \leq \theta \leq \pi$, $0 \leq r \leq a$.

$$\Rightarrow \bar{y} = \frac{2}{\pi a^2} \int_0^\pi \int_0^a r \sin \theta \cdot r \, dr d\theta = \frac{2}{\pi a^2} \int_0^\pi \frac{r^3}{3} \sin \theta \Big|_{r=0}^{r=a} d\theta = \frac{2}{\pi a^2} \int_0^\pi \frac{a^3}{3} \sin \theta d\theta$$

$$= -\frac{2}{\pi a^2} \cdot \frac{a^3}{3} \cos \theta \Big|_{\theta=0}^{\theta=\pi} = \boxed{\frac{4a}{3\pi}}$$

- c) (5 points) Now consider the following half-annular plate (center origin, inner radius $\frac{1}{2}$, outer radius 1):



Find the y -coordinate of the center of mass of this plate.

Let D denote the domain.

$$m = \iint_D \rho(x, y) dA = \iint_D 1 dA = \text{Area}(D) = \frac{1}{2} \pi \cdot 1^2 - \frac{1}{2} \pi \cdot \left(\frac{1}{2}\right)^2 = \frac{3\pi}{8}$$

outer semidisk inner semidisk

$$\bar{y} = \frac{1}{m} \iint_D y \rho(x, y) dA = \frac{8}{3\pi} \iint_D y dA$$

In polar coordinates, the domain D is given by $0 \leq \theta \leq \pi$, $\frac{1}{2} \leq r \leq 1$.

$$\Rightarrow \bar{y} = \frac{8}{3\pi} \int_0^\pi \int_{1/2}^1 r \sin \theta \cdot r \, dr d\theta = \frac{8}{3\pi} \int_0^\pi \frac{r^3}{3} \sin \theta \Big|_{r=1/2}^{r=1} d\theta = \frac{8}{3\pi} \int_0^\pi \frac{7}{24} \sin \theta d\theta$$

$$= -\frac{8}{3\pi} \cdot \frac{7}{24} \cos \theta \Big|_{\theta=0}^{\theta=\pi} = \boxed{\frac{14}{9\pi}}$$

6. Consider the vector field $\mathbf{F} = (3x^2 + 3y)\mathbf{i} + (3x + 3y^2)\mathbf{j}$.

a) (5 points) Find a potential function $f(x, y)$ such that $\mathbf{F} = \nabla f$.

$$\vec{F} = (3x^2 + 3y, 3x + 3y^2) \Rightarrow P = 3x^2 + 3y, Q = 3x + 3y^2$$

$$\frac{\partial P}{\partial y} = 3, \frac{\partial Q}{\partial x} = 3 \Rightarrow \frac{\partial Q}{\partial x} = \frac{\partial P}{\partial y} \Rightarrow \vec{F} \text{ is conservative.}$$

$$\vec{F} = \nabla f \Rightarrow P = f_x, Q = f_y.$$

$$\int P dx = \int 3x^2 + 3y dx = x^3 + 3xy$$

$$\int Q dy = \int 3x + 3y^2 dy = 3xy + y^3$$

$$\Rightarrow f(x, y) = x^3 + 3xy + y^3$$

(To find $f(x, y)$, we collect all terms without duplicates)

Note You get a different potential function by adding a constant.

b) (5 points) Evaluate the line integral

$$\int_C \mathbf{F} \cdot d\mathbf{r},$$

where the curve C is given by $\mathbf{r}(t) = t^2 \cos t \mathbf{i} + t^4 \sin t \mathbf{j}$, $0 \leq t \leq \pi$.

$$\int_C \vec{F} \cdot d\vec{r} \stackrel{\text{Fund. thm}}{=} f(\vec{r}(\pi)) - f(\vec{r}(0))$$

$$\vec{r}(\pi) = (-\pi^2, 0) \Rightarrow f(\vec{r}(\pi)) = f(-\pi^2, 0) = -\pi^6$$

$$\vec{r}(0) = (0, 0) \Rightarrow f(\vec{r}(0)) = f(0, 0) = 0.$$

$$\Rightarrow \int_C \vec{F} \cdot d\vec{r} = -\pi^6 - 0 = -\pi^6$$

7. Each part of this problem asks you to evaluate a line integral over a closed curve. The curve is always assumed to be counterclockwise.

a) (3 points) Evaluate $\int_C \frac{-y}{x^2+y^2} dx + \frac{x}{x^2+y^2} dy$ with C being $x^2 + y^2 = 1$.

This problem considers an integral of the vortex field

$$\vec{V}(x,y) = \left(-\frac{y}{x^2+y^2}, \frac{x}{x^2+y^2} \right)$$

The curve C is a circle centered at $(0,0)$, oriented counterclockwise.

$$\Rightarrow \int_C \vec{V} \cdot d\vec{r} = \boxed{2\pi} \text{ (see Fact 3(2) in the Final exam facts note)}$$

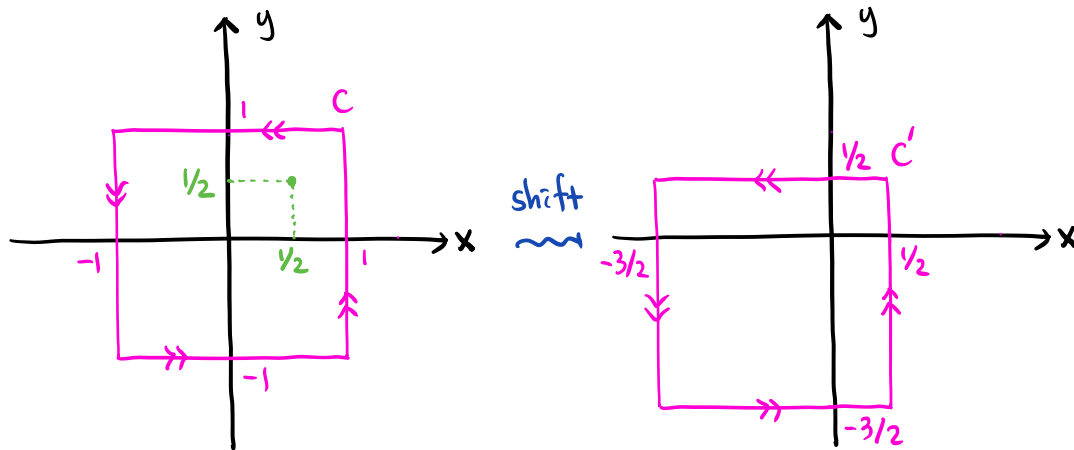
b) (3 points) Evaluate $\int_C \frac{-y}{x^2+y^2} dx + \frac{x}{x^2+y^2} dy$ with C being $\frac{(x-1)^2}{2} + (y-2)^2 = 1$.

$$\text{At } (0,0) : \frac{(0-1)^2}{2} + (0-2)^2 = \frac{1}{2} + 4 > 1.$$

\Rightarrow The curve C does not enclose $(0,0)$

$$\Rightarrow \int_C \vec{V} \cdot d\vec{r} = \boxed{0} \text{ (see Fact 3(3) in the Final exam facts note)}$$

c) (4 points) Evaluate $\int_C \frac{-2(y-\frac{1}{2})}{(x-\frac{1}{2})^2+(y-\frac{1}{2})^2} dx + \frac{2(x-\frac{1}{2})}{(x-\frac{1}{2})^2+(y-\frac{1}{2})^2} dy$ with C being the square joining the four points $(\pm 1, \pm 1)$.



$$\int_C 2\vec{V}(x-\frac{1}{2}, y-\frac{1}{2}) \cdot d\vec{r} = \int_{C'} 2\vec{V}(x,y) \cdot d\vec{r} = 2 \int_{C'} \vec{V} \cdot d\vec{r}$$

C' encloses $(0,0)$ with counterclockwise orientation.

$$\Rightarrow \int_{C'} \vec{V} \cdot d\vec{r} = 2\pi \text{ (see Fact 3(4) in the Final exam facts note)}$$

$$\Rightarrow \int_C \vec{V} \cdot d\vec{r} = 2 \cdot 2\pi = \boxed{4\pi}$$

8. The flux of the vector field \mathbf{F} out of the surface S is given by $\int \int_S \mathbf{F} \cdot \mathbf{n} dS$, where \mathbf{n} is the outward normal. In each part below, $\mathbf{r} = x\mathbf{i} + y\mathbf{j} + z\mathbf{k}$ is the position vector.

a) (2 points) Find the flux of $\mathbf{F} = \frac{\mathbf{r}}{|\mathbf{r}|^2}$ out of the surface $x^2 + y^2 + z^2 = 1$.

Let S be the sphere $x^2 + y^2 + z^2 = 1$.

The unit normal vector of S is $\vec{n} = (x, y, z) = \vec{r}$.

(See Fact 2 in the Final exam facts note)

$$\Rightarrow \vec{F} \cdot \vec{n} = \frac{\vec{r}}{|\mathbf{r}|^2} \cdot \vec{r} = \frac{\vec{r} \cdot \vec{r}}{|\mathbf{r}|^2} = \frac{|\mathbf{r}|^2}{|\mathbf{r}|^2} = 1 \text{ on } S.$$

$$\Rightarrow \iint_S \vec{F} \cdot d\vec{S} = \iint_S \vec{F} \cdot \vec{n} dS = \iint_S 1 dS = \text{Area}(S) = 4\pi \cdot 1^2 = \boxed{4\pi}$$

b) (2 points) Find the flux of $\mathbf{F} = \frac{\mathbf{r}}{|\mathbf{r}|^3}$ out of the surface $x^2 + y^2 + z^2 = 1$.

$$\vec{r} = (x, y, z) \Rightarrow |\mathbf{r}| = \sqrt{x^2 + y^2 + z^2}$$

$$\Rightarrow \vec{F} = \left(\frac{x}{(x^2 + y^2 + z^2)^{3/2}}, \frac{y}{(x^2 + y^2 + z^2)^{3/2}}, \frac{z}{(x^2 + y^2 + z^2)^{3/2}} \right) : \text{the inverse square field.}$$

The surface S is a sphere centered at $(0, 0, 0)$, oriented outward.

$$\Rightarrow \iint_S \vec{F} \cdot d\vec{S} = \boxed{4\pi} \text{ (see Fact 4(2) in the Final exam facts note)}$$

Note You can also solve part (b) using the unit normal vector \vec{n} .

c) (3 points) Find the flux of $\mathbf{F} = (x - z^2x)\mathbf{i} + (z^2y + y)\mathbf{j} + z\mathbf{k}$ out of the surface $x^2 + y^2 + z^2 = 1$.

S : the sphere $x^2 + y^2 + z^2 = 1$ with outward orientation

E : the solid ball $x^2 + y^2 + z^2 \leq 1$

$\Rightarrow \partial E = S$ is oriented outward.

$$\vec{F} = (x - z^2x, z^2y + y, z) \Rightarrow \text{div}(\vec{F}) = 3$$

$$\Rightarrow \iint_S \vec{F} \cdot d\vec{S} = \iint_{\partial E} \vec{F} \cdot d\vec{S} \stackrel{\text{div. thm}}{=} \iiint_E \text{div}(\vec{F}) dV = \iiint_E 3 dV = 3 \text{Vol}(E) = 3 \cdot \frac{4\pi}{3} \cdot 1^3 = \boxed{4\pi}$$

volume of sphere

d) (3 points) Find the flux of $\mathbf{F} = \frac{\mathbf{r}}{|\mathbf{r}|^3}$ out of the surface $(x - \frac{1}{6})^2 + \frac{1}{2}(y - \frac{1}{3})^2 + (z + \frac{1}{5})^2 = 1$.

\vec{F} is the inverse square field as in part (b).

$$\text{At } (0, 0, 0) : (0 - \frac{1}{6})^2 + \frac{1}{2}(0 - \frac{1}{3})^2 + (0 + \frac{1}{5})^2 = (\frac{1}{6})^2 + \frac{1}{2}(\frac{1}{3})^2 + (\frac{1}{5})^2 < 1.$$

\Rightarrow The surface S encloses $(0, 0, 0)$ with outward orientation.

$$\Rightarrow \iint_S \vec{F} \cdot d\vec{S} = \boxed{4\pi} \text{ (see Fact 4(4) in the Final exam facts note)}$$

9. Let $\mathbf{F} = yz\mathbf{i} + 2xz\mathbf{j} + 3xy\mathbf{k}$ be the vector field for this problem. The surface S is $x^2 + y^2 = 1$ with $-1 \leq z \leq 1$. The surface is a cylinder. The surface is obviously open at the top or the bottom. As always, the position vector is $\mathbf{r} = x\mathbf{i} + y\mathbf{j} + z\mathbf{k}$.

a) (3 points) The bottom boundary of the surface denoted by C_1 is given by $x^2 + y^2 = 1$ and $z = -1$. The orientation is counterclockwise in the x - y plane. Find the circulation $\int_{C_1} \mathbf{F} \cdot d\mathbf{r}$.

C_1 is parametrized by $\vec{r}_1(t) = (\cos t, \sin t, -1)$ with $0 \leq t \leq 2\pi$.

$$\int_{C_1} \vec{F} \cdot d\vec{r} = \int_0^{2\pi} \vec{F}(\vec{r}_1(t)) \cdot \vec{r}'_1(t) dt$$

$$\vec{F} = (yz, 2xz, 3xy) \Rightarrow \vec{F}(\vec{r}_1(t)) = (-\sin t, -2\cos t, 3\cos t \sin t)$$

$$\vec{r}'_1(t) = (-\sin t, \cos t, 0) \Rightarrow \vec{F}(\vec{r}_1(t)) \cdot \vec{r}'_1(t) = \sin^2 t - 2\cos^2 t$$

$$\begin{aligned} \Rightarrow \int_{C_1} \vec{F} \cdot d\vec{r} &= \int_0^{2\pi} \sin^2 t - 2\cos^2 t dt = \int_0^{2\pi} \frac{1 - \cos(2t)}{2} - (1 + \cos(2t)) dt \\ &= \int_0^{2\pi} -\frac{1 + 3\cos(2t)}{2} dt = -\left(\frac{t}{2} + \frac{3\sin(2t)}{4}\right) \Big|_{t=0}^{t=2\pi} = \boxed{-\pi} \end{aligned}$$

b) (2 points) The top boundary of the surface denoted by C_2 is given by $x^2 + y^2 = 1$ and $z = 1$. The orientation is counterclockwise in the x - y plane. Find the circulation $\int_{C_2} \mathbf{F} \cdot d\mathbf{r}$.

C_2 is parametrized by $\vec{r}_2(t) = (\cos t, \sin t, 1)$ with $0 \leq t \leq 2\pi$.

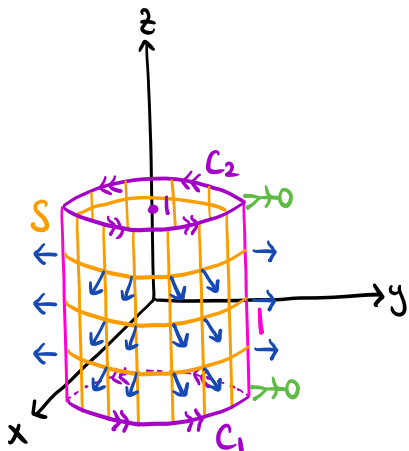
$$\int_{C_2} \vec{F} \cdot d\vec{r} = \int_0^{2\pi} \vec{F}(\vec{r}_2(t)) \cdot \vec{r}'_2(t) dt$$

$$\vec{F} = (yz, 2xz, 3xy) \Rightarrow \vec{F}(\vec{r}_2(t)) = (\sin t, 2\cos t, 3\cos t \sin t)$$

$$\vec{r}'_2(t) = (-\sin t, \cos t, 0) \Rightarrow \vec{F}(\vec{r}_2(t)) \cdot \vec{r}'_2(t) = -\sin^2 t + 2\cos^2 t$$

$$\Rightarrow \int_{C_2} \vec{F} \cdot d\vec{r} = \int_0^{2\pi} -\sin^2 t + 2\cos^2 t dt = -\int_{C_1} \vec{F} \cdot d\vec{r} \stackrel{(a)}{=} \boxed{\pi}$$

c) (5 points) Suppose the unit normal \mathbf{n} to the cylindrical surface S points outward away from the axis of the cylinder. Calculate the flux $\int \int_S \text{curl } \mathbf{F} \cdot \mathbf{n} dS$.



$\partial S = C_1 - C_2$ is positively oriented

(C_2 is negatively oriented)

*The right hand rule does not apply here.

$$\begin{aligned} \iint_S \text{curl}(\vec{F}) \cdot d\vec{S} &\stackrel{\text{Stokes' thm}}{=} \int_{\partial S} \vec{F} \cdot d\vec{S} = \int_{C_1} \vec{F} \cdot d\vec{r} - \int_{C_2} \vec{F} \cdot d\vec{r} \\ &\stackrel{(a), (b)}{=} -\pi - \pi = \boxed{-2\pi} \end{aligned}$$